




Convert the fraction to a decimal.

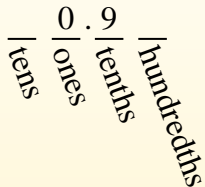
Answers

Converting from a fraction to a decimal is simple as long as you remember the place values.



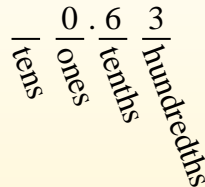
$$\frac{9}{10}$$

The example above is nine-tenths. Lets look at how we'd write that as a decimal.



$$\frac{63}{100}$$

We do the same thing for the problem above only make sure we're in the hundredths place.



Ex. 0.1

1. _____

2. _____

3. _____

4. _____

5. _____

6. _____

7. _____

8. _____

9. _____

10. _____

11. _____

12. _____

13. _____

14. _____

15. _____

16. _____

17. _____

18. _____

19. _____

20. _____

Ex) $\frac{1}{10} = 0.1$

1) $\frac{5}{100} =$

2) $\frac{2}{100} =$

3) $\frac{62}{100} =$

4) $\frac{7}{100} =$

5) $\frac{6}{100} =$

6) $\frac{69}{100} =$

7) $\frac{8}{10} =$

8) $\frac{81}{100} =$

9) $\frac{8}{100} =$

10) $\frac{5}{10} =$

11) $\frac{2}{10} =$

12) $\frac{36}{100} =$

13) $\frac{4}{10} =$

14) $\frac{9}{100} =$

15) $\frac{1}{100} =$

16) $\frac{76}{100} =$

17) $\frac{59}{100} =$

18) $\frac{7}{10} =$


19) $\frac{99}{100} =$

20) $\frac{6}{10} =$



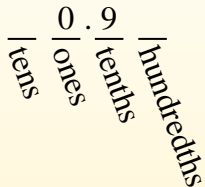
Convert the fraction to a decimal.

Converting from a fraction to a decimal is simple as long as you remember the place values.



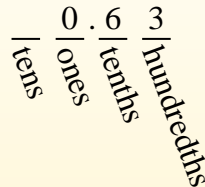
$$\frac{9}{10}$$

The example above is nine-tenths. Lets look at how we'd write that as a decimal.



$$\frac{63}{100}$$

We do the same thing for the problem above only make sure we're in the hundredths place.



Answers

- Ex. 0.1
- 1. 0.05
- 2. 0.02
- 3. 0.62
- 4. 0.07
- 5. 0.06
- 6. 0.69
- 7. 0.8
- 8. 0.81
- 9. 0.08
- 10. 0.5
- 11. 0.2
- 12. 0.36
- 13. 0.4
- 14. 0.09
- 15. 0.01
- 16. 0.76
- 17. 0.59
- 18. 0.7
- 19. 0.99
- 20. 0.6

Ex) $\frac{1}{10} = 0.1$

1) $\frac{5}{100} = 0.05$

2) $\frac{2}{100} = 0.02$

3) $\frac{62}{100} = 0.62$

4) $\frac{7}{100} = 0.07$

5) $\frac{6}{100} = 0.06$

6) $\frac{69}{100} = 0.69$

7) $\frac{8}{10} = 0.8$

8) $\frac{81}{100} = 0.81$

9) $\frac{8}{100} = 0.08$

10) $\frac{5}{10} = 0.5$

11) $\frac{2}{10} = 0.2$

12) $\frac{36}{100} = 0.36$

13) $\frac{4}{10} = 0.4$

14) $\frac{9}{100} = 0.09$

15) $\frac{1}{100} = 0.01$

16) $\frac{76}{100} = 0.76$

17) $\frac{59}{100} = 0.59$

18) $\frac{7}{10} = 0.7$

19) $\frac{99}{100} = 0.99$

20) $\frac{6}{10} = 0.6$